

Name: \_\_\_\_\_

# Morning Math

Write the date.

\_\_\_\_\_, \_\_\_\_\_, \_\_\_\_\_


Determine the missing numbers.

$$73 + 18 = \square$$


$$22 + 66 = \square$$

$$\square = 45 - 36$$


Color in two different ways to show the amount.



Write <, > or = in the jar to compare.

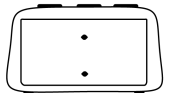

569  678

372  327

677  277

382  283

Show the time.



It is six fifteen.

Solve the problem.

55 ducks were in a pond when some flew away. If there are now 37 ducks in the pond, how many flew away?